

THE KENYA NATIONAL EXAMINATIONS COUNCIL
Kenya Certificate of Secondary Education

121/1

MATHEMATICS**Paper 1****ALT A****Nov. 2019 – 2½ hours**

Name Index Number

Candidate's Signature Date

Instructions to candidates

- Write your name and index number in the spaces provided above.
- Sign and write the date of examination in the spaces provided above.
- This paper consists of **two** sections; **Section I** and **Section II**.
- Answer **all** the questions in **Section I** and any **five** questions from **Section II**.
- Show **all** the steps in your calculations, giving your answers at each stage in the spaces provided below each question.
- Marks may be given for correct working even if the answer is wrong.
- Non-programmable** silent electronic calculators and KNEC Mathematical tables may be used, except where stated otherwise.
- This paper consists of **18** printed pages.
- Candidates should check the question paper to ascertain that all the pages are printed as indicated and that no questions are missing.
- Candidates should answer the questions in English.

For Examiner's Use Only
Section I

1	2	3	4	5	6	7	8	9	10	11	12	13	14	15	16	Total

Section II

17	18	19	20	21	22	23	24	Total

Grand Total



919228



Turn over

SECTION I (50 marks)

Answer all the questions in this section in the spaces provided.

1. Without using mathematical tables or a calculator, evaluate:

$$\frac{5.4}{0.025 \times 3.6}$$

(3 marks)

2. Express 1728 and 2025 in terms of their prime factors. Hence evaluate:

$$\frac{\sqrt[3]{1728}}{\sqrt{2025}}$$

(4 marks)

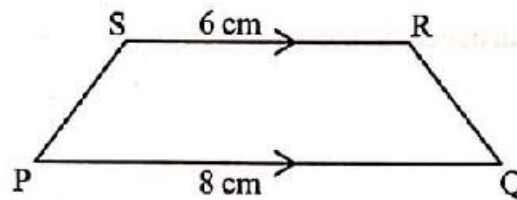
3. Juma left his home at 8.30 a.m. He drove a distance of 140 km and arrived at his aunt's home at 10.15 a.m. Determine the average speed, in km/h, for Juma's journey.

(3 marks)

4. Expand and simplify:
 $4(q + 6) + 7(q - 3)$.

(2 marks)

5. In the trapezium PQRS shown below, $PQ = 8 \text{ cm}$ and $SR = 6 \text{ cm}$.



If the area of the trapezium is 28 cm^2 , find the perpendicular distance between PQ and SR.

(2 marks)

6. Given that $\sqrt[3]{9^4} = 3^n$, find the value of n .

(3 marks)

7. Three villages A, B and C are such that B is 53 km on a bearing of 295° from A and C is 75 km east of B.
- (a) Using a scale of 1 cm to represent 10 km, draw a diagram to show the relative positions of villages A, B and C. (2 marks)
- (b) Determine the distance, in km, of C from A. (2 marks)
8. A retailer bought a bag of tea leaves. If the retailer were to repack the tea leaves into smaller packets of either 40 g, 250 g or 350 g, determine the least mass, in grams, of the tea leaves in the bag. (3 marks)

9. Given that $\sin 2x = \cos (3x - 10^\circ)$, find $\tan x$, correct to 4 significant figures. (3 marks)
10. A tourist converted 5820 US dollars into Kenya Shillings at the rate of Ksh 102.10 per dollar. While in Kenya, he spent Ksh 450 000 and converted the balance into dollars at the rate of Ksh 103.00 per dollar. Calculate the amount of money, to the nearest dollar, that remained. (3 marks)
11. Given that $b = \begin{pmatrix} 2 \\ 4 \end{pmatrix}$, $c = \begin{pmatrix} 3 \\ 2 \end{pmatrix}$ and $a = 3c - 2b$, find the magnitude of a , correct to 2 decimal places. (4 marks)

12. Using a ruler and a pair of compass only, construct a rhombus PQRS such that $PQ = 6\text{ cm}$ and $\angle SPQ = 75^\circ$. Measure the length of PR. (4 marks)

13. Solve the inequality $2x - 1 \leq 3x + 4 < 7 - x$. (3 marks)

14. Given that $A = \begin{pmatrix} 2 & 3 \\ 4 & 4 \end{pmatrix}$, $B = \begin{pmatrix} x & 1 \\ 2 & 3 \end{pmatrix}$ and that AB is a singular matrix, find the value of x . (3 marks)

15. A trader bought two types of bulbs A and B at Ksh 60 and Ksh 56 respectively. She bought a total of 50 bulbs of both types at a total of Ksh 2 872. Determine the number of type A bulbs that she bought. (3 marks)

16. A bus plies between two towns P and R via town Q daily. On each day it departs from P at 8.15 a.m. and stops for 40 minutes at Q before proceeding to R.

On a certain day, the bus took 5 hours 40 minutes to travel from P to Q and 3 hours 15 minutes to travel from Q to R. Find, in 24 hour clock system, the time the bus arrived at R. (3 marks)

SECTION II (50 marks)

Answer any five questions from this section in the spaces provided.

17. A rectangular water tank measures 2.4 m long, 2 m wide and 1.5 m high. The tank contained some water up to a height of 0.45 m.

(a) Calculate the amount of water, in litres, needed to fill up the tank. (3 marks)

- (b) An inlet pipe was opened and water let to flow into the tank at a rate of 10 litres per minute. After one hour, a drain pipe was opened and water allowed to flow out of the tank at a rate of 4 litres per minute.

Calculate:

(i) the height of water in the tank after 3 hours; (4 marks)

(ii) the total time taken to fill up the tank. (3 marks)

18. (a) A line, L_1 , passes through the points (3, 3) and (5, 7). Find the equation of L_1 in the form $y = mx + c$, where m and c are constants. (3 marks)

- (b) Another line L_2 is perpendicular to L_1 and passes through $(-2, 3)$. Find:

(i) the equation of L_2 ; (3 marks)

(ii) the x -intercept of L_2 . (1 mark)


- (c) Determine the point of intersection of L_1 and L_2 . (3 marks)

19. A triangle ABC with vertices A $(-2, 2)$, B $(1, 4)$ and C $(-1, 4)$ is mapped onto triangle A'B'C' by a reflection in the line $y = x + 1$.

(a) On the grid provided draw:

(1 mark)

(i) triangle ABC;



(ii) the line $y = x + 1$;

(2 marks)

(iii) triangle A'B'C'.

(2 marks)

- (b) Triangle A''B''C'' is the image of triangle A'B'C' under a negative quarter turn about $(0, 0)$. On the same grid, draw triangle A''B''C''.

(3 marks)

(c) State the type of congruence between triangles:

(i) ABC and $A'B'C'$;

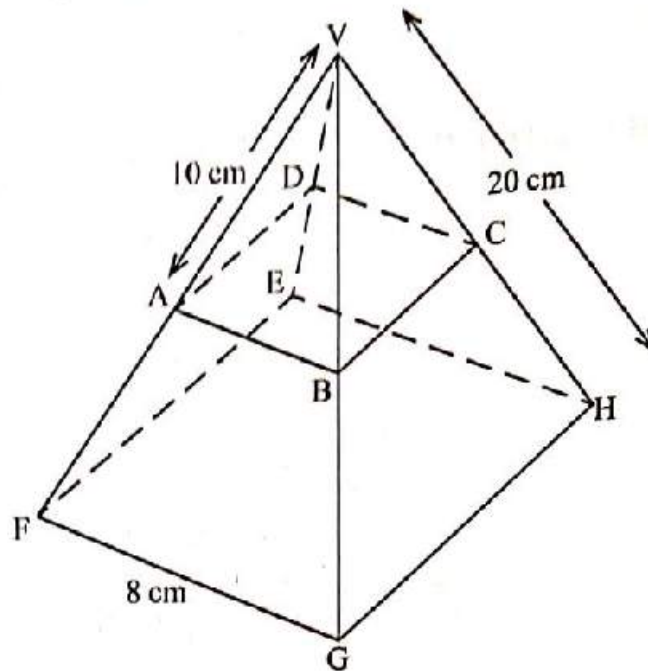
(1 mark)

(ii) $A'B'C'$ and $A''B''C''$.

(1 mark)



20. The figure below is a right pyramid $VEFGH$ with a square base of 8 cm and a slant edge of 20 cm. Points A, B, C and D lie on the slant edges of the pyramid such that $VA = VB = VC = VD = 10$ cm and plane $ABCD$ is parallel to the base $EFGH$.



- (a) Find the length of AB . (2 marks)
- (b) Calculate, correct to 2 decimal places:
- (i) the length of AC ; (2 marks)
- (ii) the perpendicular height of the pyramid $VABCD$. (2 marks)

- (c) The pyramid VABCD was cut off. Find the volume of the frustum ABCDEFGH correct to 2 decimal places. (4 marks)

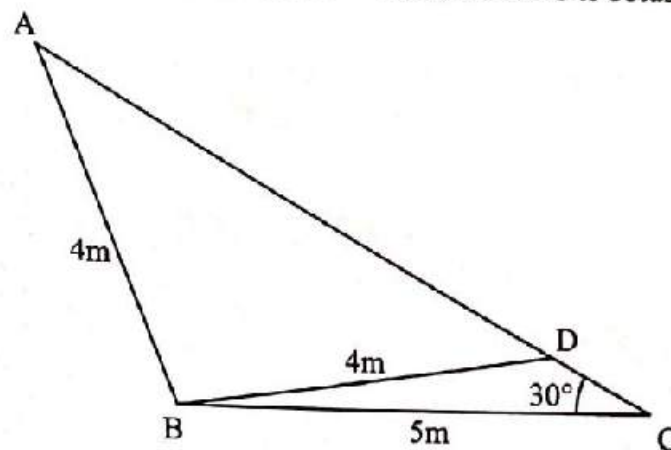


21. The heights of 40 athletes in a county athletics competition were as shown in the table below:

Height, <i>cm</i>	Frequency
150 – 159	2
160 – 169	8
170 – 179	10
180 – 189	x
190 – 199	6
200 – 209	2

- (a) Find the value of x . (1 mark)
- (b) State the modal class. (1 mark)
- (c) Calculate:
- (i) the mean height of the athletes; (4 marks)
- (ii) the median height, correct to 1 decimal place, of the athletes. (4 marks)

22. The figure below represents a triangular flower garden ABC in which $AB = 4\text{ m}$, $BC = 5\text{ m}$ and $\angle BCA = 30^\circ$. Point D lies on AC such that $BD = 4\text{ m}$ and $\angle BDC$ is obtuse.



Find, correct to 2 decimal places:

- (a) $\angle BDC$;

(3 marks)

- (b) the length of AD;

(3 marks)

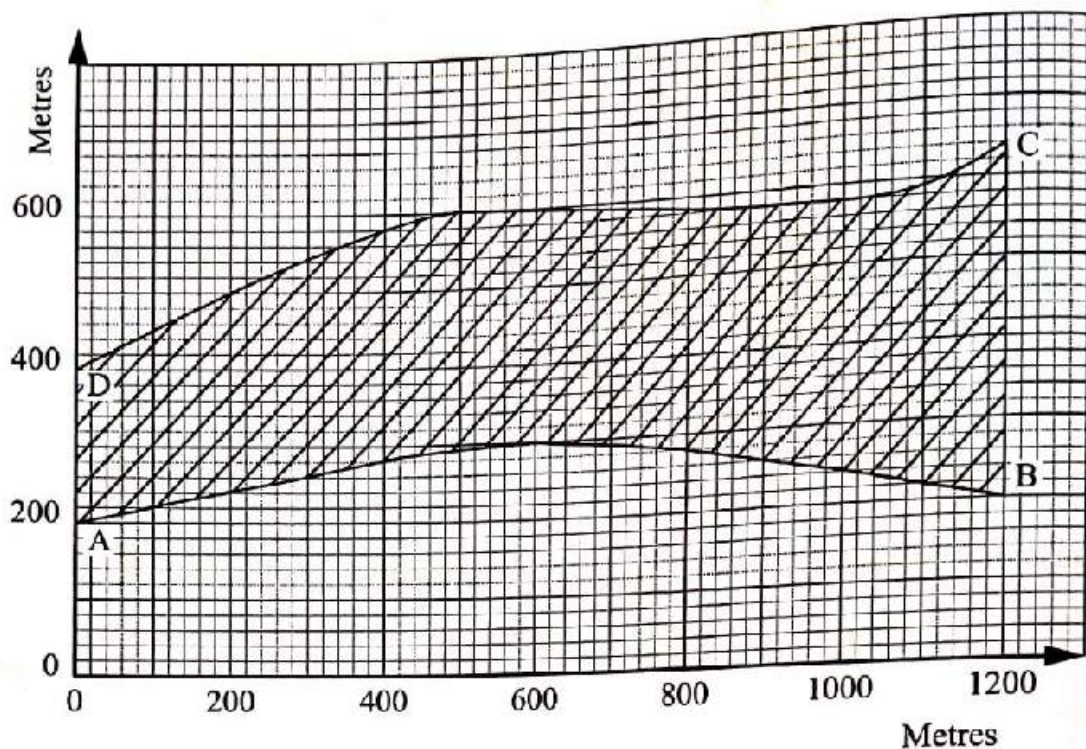
- (c) the length of DC;

(2 marks)

- (d) the area of the flower garden ABC.

(2 marks)

23. The shaded region on the graph below shows a piece of land ABCD earmarked for building a sub-county hospital.



- (a) Write down the ordinates of curves AB and DC for $x = 0, 200, 400, 600, 800, 1000$ and 1200 . (2 marks)
- (b) Use trapezium rule, with 6 strips to estimate the area of the piece of land ABCD, in hectares. (4 marks)

- (c) Use mid-ordinate rule with 3 strips to estimate the area of the piece of land, in hectares.
(4 marks)

END PAGE

24. The equation of a curve is $y = x^3 + x^2 - x - 1$

(a) Determine:

(3 marks)

(i) the stationary points of the curve;

(ii) the nature of the stationary points in (a) (i) above.

(2 marks)

(b) Determine:

(i) the equation of the tangent to the curve at $x = 1$;

(3 marks)

(ii) the equation of the normal to the curve at $x = 1$.

(2 marks)

THIS IS THE LAST PRINTED PAGE.

Kenya Certificate of Secondary Education, 2019

121/1

919228